





Name _____ Date _____ Per _____

European Demographics Activity

It is strongly recommended that you create a rough draft of each graph/table prior to labeling them on here

1) Use the CIA World Factbook to find the breakdown for the different **ethnic groups** for the following countries: Andorra, Czechia, Ireland, and Switzerland. This information can be found on each country's Factbook page under the "People and Society" tab. Please create a **bar graph** for each country that correctly represents how each country's population is broken down by ethnicity.




2) Create a **line graph** that represents the population trends over the last 50 years of the countries of Germany, Italy, Poland, and the United Kingdom, based on the information provided below:

Germany: 1960 = 72.8 million, 1970 = 78.2 million, 1980 = 78.3 million, 1990 = 79.4 million, 2000 = 82.2 million, 2010 = 81.8 million

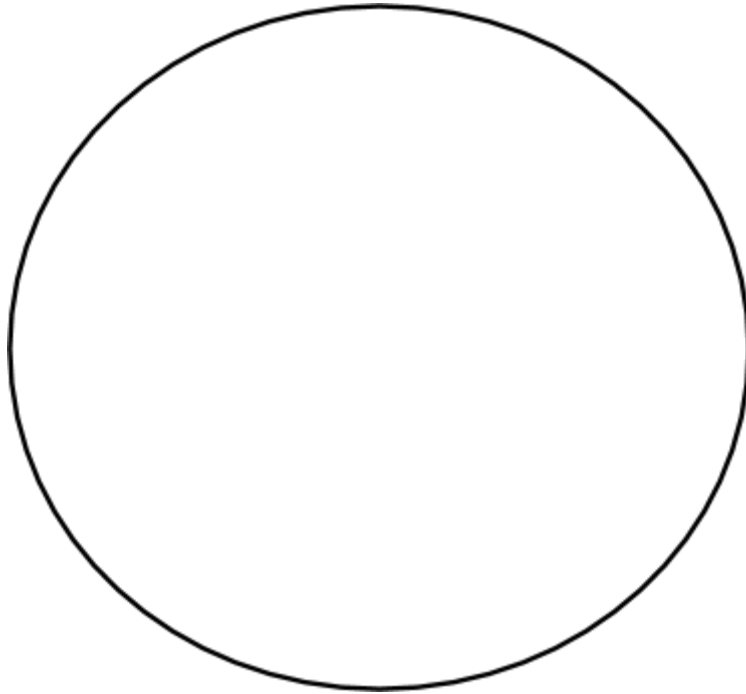
Italy: 1960 = 50.2 million, 1970 = 53.8 million, 1980 = 56.4 million, 1990 = 56.7 million, 2000 = 56.9 million, 2010 = 60.0 million

Poland: 1960 = 29.6 million, 1970 = 32.7 million, 1980 = 35.7 million, 1990 = 38.1 million, 2000 = 38.5 million, 2010 = 38.2 million

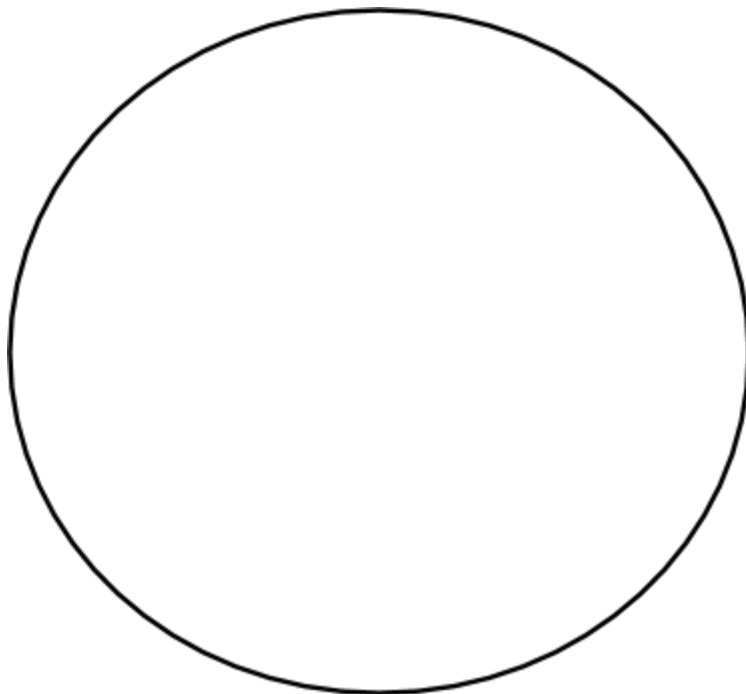
United Kingdom = 1960 = 52.4 million, 1970 = 55.7 million, 1980 = 56.3 million, 1990 = 57.2 million, 2000 = 58.9 million, 2010 = 62.3 million



3) Create a **pie graph** that represents the major religions practiced throughout Europe. Use the following breakdown: Roman Catholic 55%, Protestant 18.8%, Other 15%, Eastern Orthodox 8.8%, Islam 2.2%, Judaism 0.2%



4) Create a **pie graph** that shows how the population of Europe is divided between the continent's four sub-regions. Use the population data PROVIDED BY YOUR BOOK on pages 268 and 270. The map on page 288 lists the four sub-regions. Use 510,899,000 as Europe's total population.



5) Create a **table** for the countries listed below, that details the following demographic data: **total land area in square miles**, **population**, **climate zones** (use map on page 266), **primary languages**, **major religions**, and **type of government**. When creating your table, rank the countries based on their total land area. USE THE CULTURE GRAMS WEBSITE to find the needed information. The countries you will need to research are: Spain, Norway, France, and Greece. It would probably work best to rotate this page to build the table.

--