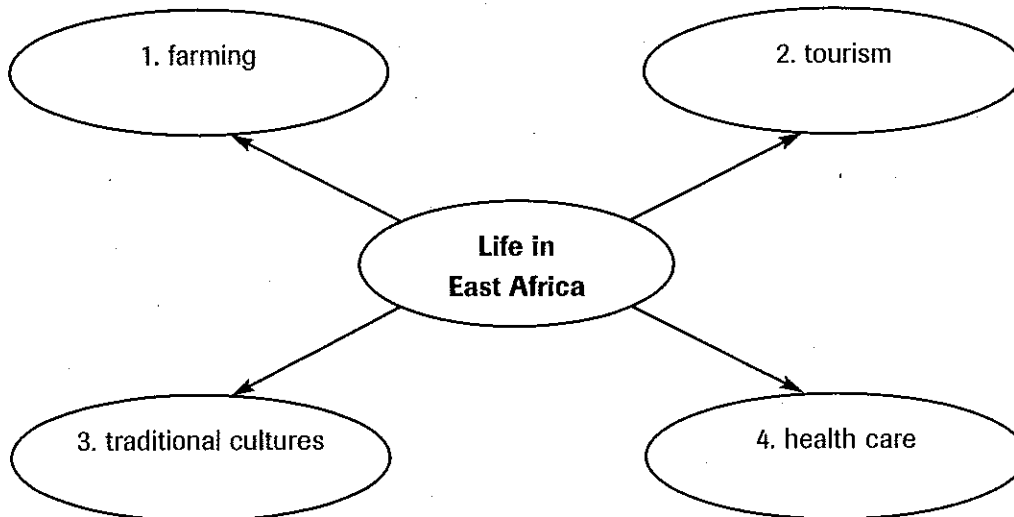


# Guided Reading

**A. Making Generalizations** Use the chart below to generalize about the history of East Africa.

History of East Africa
1. birthplace of humans
2. civilizations and trade
3. colonization
4. conflict in East Africa

**B. Drawing Conclusions** Use the chart below to draw conclusions about aspects of East African life.



**C. Map and Graph Skills** Use the map on page 431 in your textbook to answer the following questions.

1. **Place** Why do you think Aksum is not on this map?

\_\_\_\_\_

2. **Location** What do all the African trade cities shown on this map have in common?

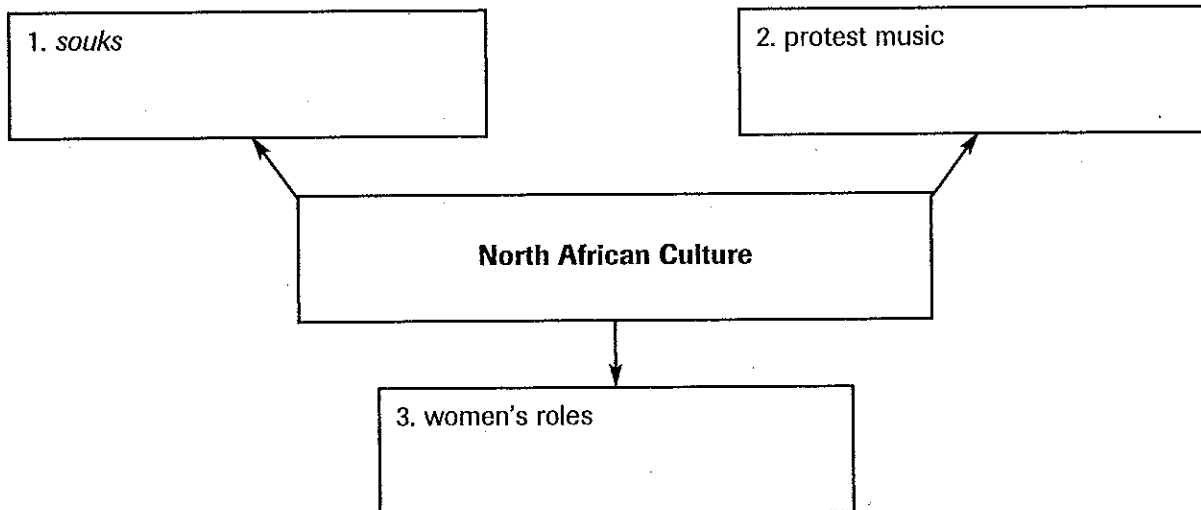
\_\_\_\_\_

## Guided Reading

**A. Making Generalizations** Use the chart below to generalize about important factors that have shaped North Africa.

Factors That Have Shaped North Africa		
1. countries of North Africa		
2. the Nile valley	3. Islam	4. oil

**B. Drawing Conclusions** Use the organizer below to draw conclusions about the culture of North Africa.



**C. Map and Graph Skills** Use the map on page 439 in your textbook to answer the following questions.

**1. Region** What regions of Africa were influenced by Islam?

\_\_\_\_\_

**2. Region** What physical features of North Africa do you think encouraged and limited the spread of Islam?

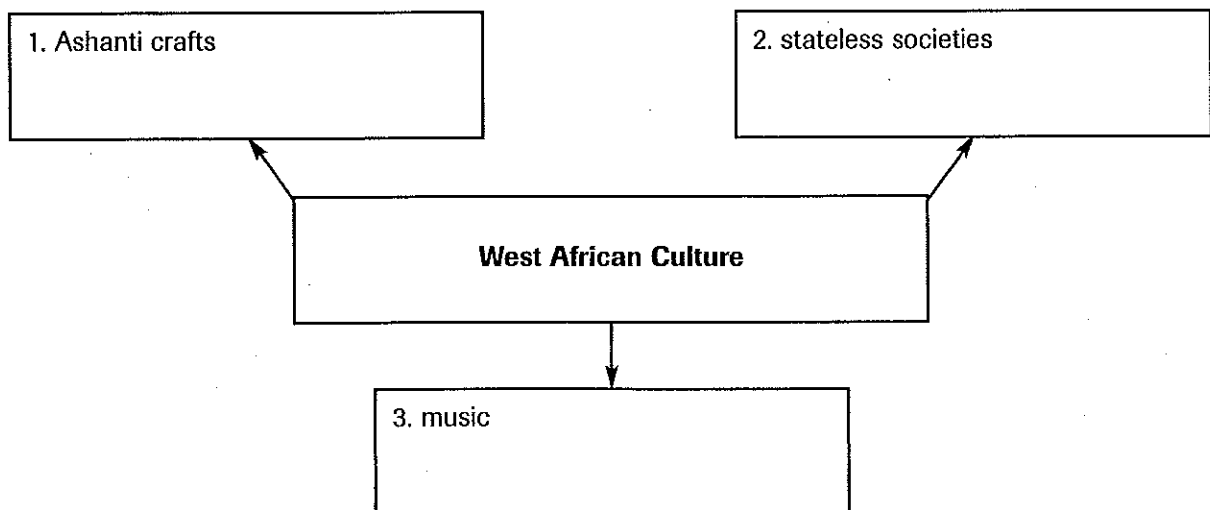
\_\_\_\_\_

## Guided Reading

**A. Making Comparisons** Use the chart below to make comparisons between the economic past and present of West Africa.

Trade in the Past	Today's Economies
1. ancient West Africa and trading empires	2. Ghana
	3. Sierra Leone

**B. Drawing Conclusions** Use the organizer below to draw conclusions about of the culture of West Africa.



**C. Map and Graph Skills** Use the chart on page 443 in your textbook to answer the following questions.

**1. Analyzing Data** Which country's GNP stayed about the same?

\_\_\_\_\_

**2. Drawing Conclusions** How many times greater is the most recent GNP for Ghana than the most recent GNP for Sierra Leone?

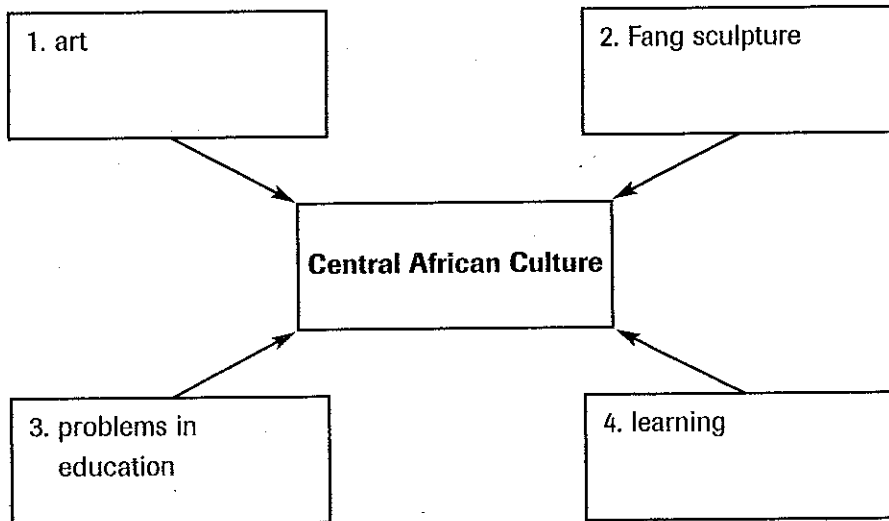
\_\_\_\_\_

## Guided Reading

**A. Making Generalizations** Use the chart below to generalize about important factors that have shaped Central Africa.

Factors That Have Shaped Central Africa		
1. countries of Central Africa		
2. Bantu migrations	3. slave trade	4. start of colonialism
5. effects of colonialism	6. postcolonial economic effects	7. Congo's economic chaos

**B. Drawing Conclusions** Use the organizer below to draw conclusions about the culture of Central Africa.



**C. Map and Graph Skills** Use the map on page 448 in your textbook to answer the following questions.

**1. Movement** Around what year did the Bantu migrations end?

\_\_\_\_\_

**2. Region** Why do you think the Bantu moved south and not northward?

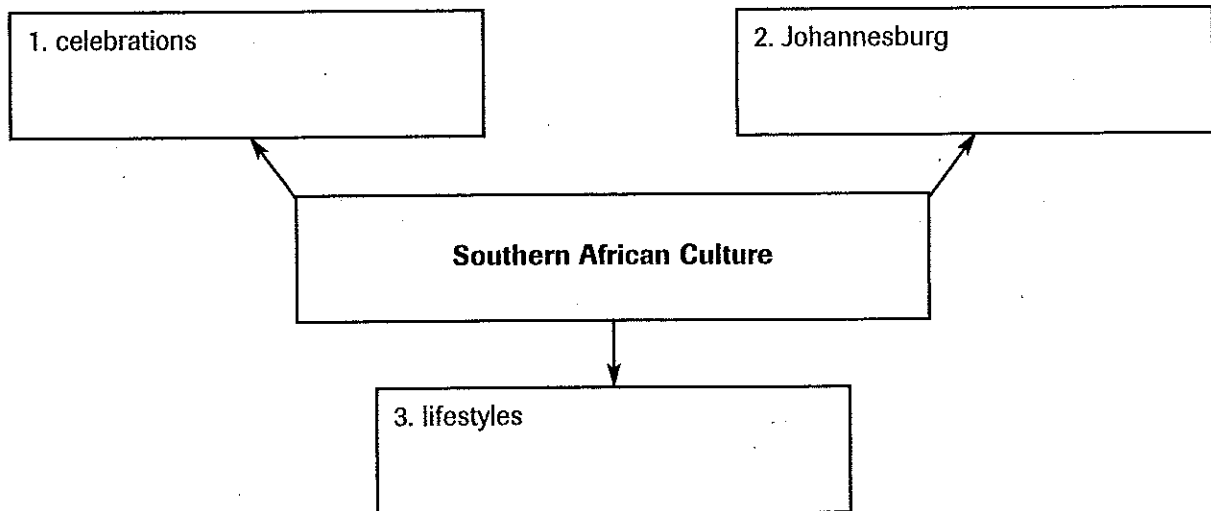
\_\_\_\_\_

# Guided Reading

**A. Making Comparisons** Use the chart below to make comparisons between the economic past and present of Southern Africa.

Empires in the Past	Today's Economies
1. Great Zimbabwe	5. South Africa
2. Mutapa Empire	
3. ethnic clashes	6. Botswana
4. apartheid	

**B. Drawing Conclusions** Use the organizer below to draw conclusions about the culture of Southern Africa.



**C. Map and Graph Skills** Use the timeline on page 455 in your textbook to answer the following questions.

**1. Drawing Conclusions** What year did DeBeers gain control of 90 percent of the African diamond industry?

\_\_\_\_\_

**2. Drawing Conclusions** How many years passed between the formation of the ANC and the first multiracial election?

\_\_\_\_\_